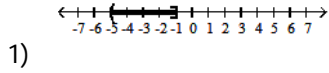
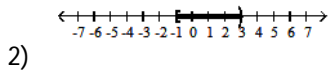
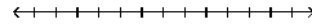


Name _____

(15.3 a&b) Express the following in interval notation.



6) $2 - 2x \geq 10$ or $3x - 5 \geq 4$




Solve the compound inequality.

7) $3(x + 4) < 18$ and $-2(x + 2) > -12$

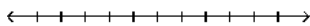
Solve the compound inequality and write the solution set using set-builder notation. Graph the solution set using a number line.

3) $x < 1$ and $x \leq -2$



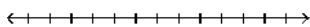
8) $x - 3 \geq -5$ or $x - 3 \leq 5$

4) $2x + 4 \geq 12$ and $x - 7 < 2$



9) $2 - 2x < -2$ and $6x + 2 < -10$

5) $x \geq 3$ or $3x < -15$



Solve the three-part inequality. Write your answer in interval notation.

10) $-26 < 5x + 4 \leq -6$

11) $5 < \frac{12x - 12}{9} < 14$

(15.5 a & b) Decide if the given values of x are solutions to the equation (Y/N). Be sure to support your answer.

12) $|2x - 1| = 7$; $x = 4$, $x = -4$

Solve the equation.

13) $|x| = 12$

14) $|r - 9| = 8$

15) $|b - 5| + 2 = 7$

16) $|a| = -8$

17) $4|3x - 5| - 8 = -6$

Round to the nearest hundredth if necessary.

Solve the absolute value equation.

18) $|5x + 3| = |2 - x|$

Solve the inequality. Give your answer using interval notation.

19) $|1 - x| \geq 8$

20) $|x| \leq 3$

21) $|x + 9| > 2$

22) $|-4x + 3| > -4$

23) $1 - \left| \frac{3x}{2} \right| > 2$

Solve the absolute value inequality. Write your answer in interval notation.

24) $|2x - 10| > 2$

25) $\left| \frac{x - 2}{3} \right| \geq 5$

26) $|6y - 9| > -4$

27) $|3y - 9| + 1 < -1$

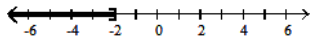
Answer Key

Testname: WKS_15.3_15.5_ALL

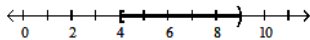
1) $(-5, -1]$

2) $[-1, 3)$

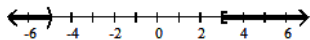
3) $\{x|x \leq -2\}$



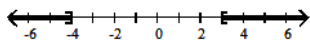
4) $\{x|4 \leq x < 9\}$



5) $\{x|x < -5 \text{ or } x \geq 3\}$



6) $\{x|x \leq -4 \text{ or } x \geq 3\}$



7) $(-\infty, 2)$

8) $(-\infty, \infty)$

9) No solution

10) $(-6, -2]$

11) $\left(\frac{19}{4}, \frac{23}{2}\right)$

12) Yes, No

13) $-12, 12$

14) $1, 17$

15) $10, 0$

16) No solution

17) $1.5, 1.83$

18) $\frac{-1}{6}, \frac{-5}{4}$

19) $(-\infty, -7] \cup [9, \infty)$

20) $[-3, 3]$

21) $(-\infty, -11) \cup (-7, \infty)$

22) All real numbers

23) No solution

24) $(-\infty, 4) \cup (6, \infty)$

25) $(-\infty, -13] \cup [17, \infty)$

26) $(-\infty, \infty)$

27) No solution